

GAIKWAD KIDS OLYMPIAD – 2025-26

SAMPLE QUESTION PAPER CUM ANSWER SHEET BOOKLET

GROUP - A LKG

Date : __/__/__

SCHOOL CODE

GKO24A00__

GUIDELINES FOR THE CANDIDATE

1. The Question Paper comprises of four sections : English (10Q); Mathematics(10Q); Environmental Science and Logical Reasoning(10Q)
2. Each question carries 1 mark.
3. There is no negative marking.
4. **The student should tick the answer in the given box only.**
5. Time duration for the Olympiad examination : 45 minutes.
6. Reading time : 15 minutes.
7. Students have to use pencil for solving the paper.

Students Details :

Complete Name of the student : _____

FOR THE USE OF THE EXAMINER

MARKS EARNED:

Subjects	English	Mathematics	Environmental Science + Logical Reasoning
Marks			


Name and Sign of the Examiner : _____ Date : __/__/__


Name and Sign of the Rechecking Authority : _____ Date : __/__/__

ENGLISH

Tick the correct option.


1) What comes after letter N ?

a) 
☐


b) 
☐

2) Fill the missing letter, and complete the spelling.

EY ____

a) 
☐




b) 
☐

3) Fill the letter and Complete the Spelling.

B ____ O K

a) O
☐



b) M
☐


4) Choose the profession of the person in the given image.

a) Nurse
☐




b) Teacher
☐

5) Find the upper case of given image.

a) 
☐



b) 
☐

6) Identify the first letter of the spelling of the given picture.

a) H
☐



b) C
☐

7) What is the synonym of hot ?

a) go
☐

b) warm
☐

c) cold
☐

d) put
☐

8) Name each picture

i)



ii)



9) Match the action with the words.




Sit down

Hands up

Cry

Smile

10) Match the picture with the beginning letter of the name of the picture.



N

M

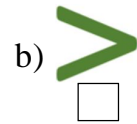
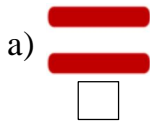
S

L

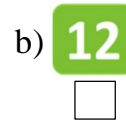



MATHEMATICS

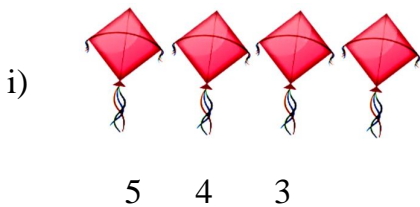
1) Which symbol should be used in place of '?'





2) Find the missing number.




3) Circle the correct number and write the number name in the blank provided below.



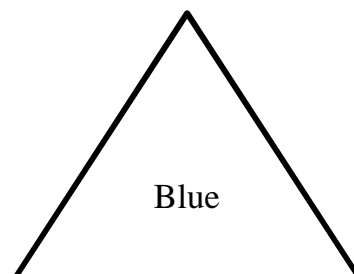
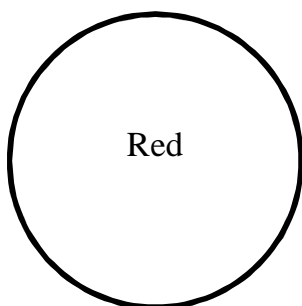
4) Count the items in set a and set b. Tick the set with less items.



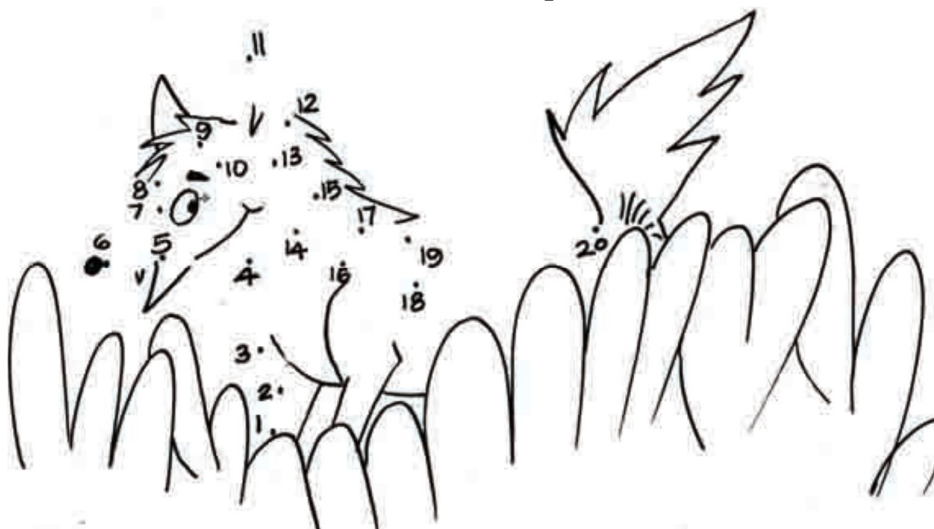
5) Fill in the missing numbers.




6) Colour the shapes given below.



7) Join the dots from 1 to 20 and colour the picture.



8) Tick the bird with the longer beak.


☐

☐

9) Which number comes before and after ?

i) 11

ii) 7

10) Match the number names with the correct number.

i) Six 9


ii) Eight 6

iii) Nine 4

iv) Four 8

EVS + LOGICAL REASONING

1) Colour and tick the correct word for each picture.



Orange ☐

Watermelon ☐



Pumpkin ☐

Brinjal ☐

2) What is the colour of the images given below ?

i)



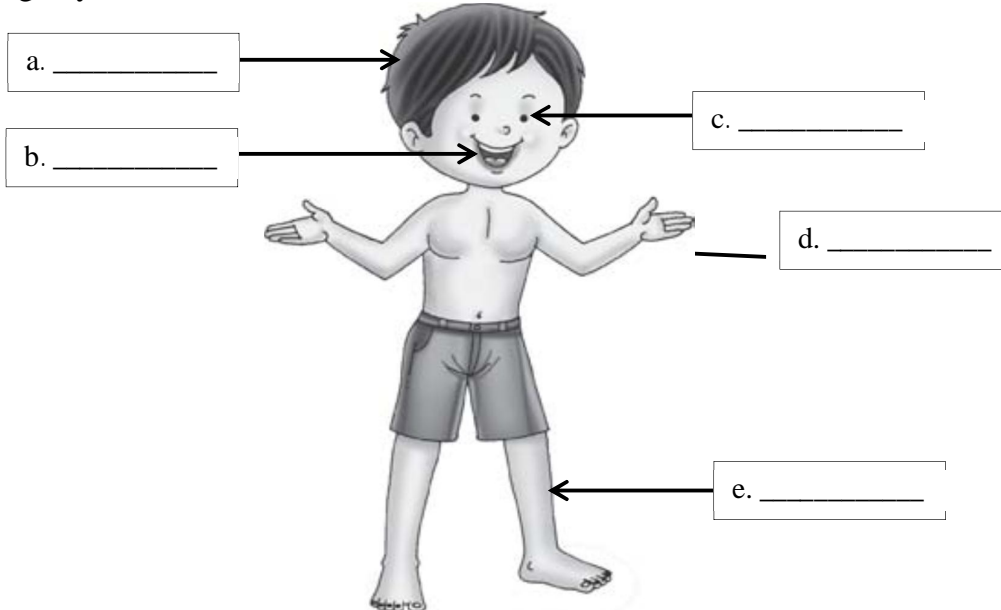
Red ☐
Blue ☐

ii)



Black ☐
Green ☐

3) Choose the correct body parts from the help box & complete the blanks. (Any Four)
[Leg, Eye, Ear, Mouth, Hair, Hand]



4) Circle O the things you wear on take to school.



5) Look at the pictures. Write 'W' for wild animals and 'D' for domestic animals.



a. _____



b. _____



c. _____



d. _____

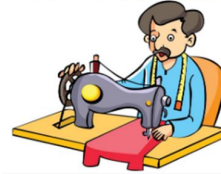


e. _____




f. _____

6) Match the helpers with the right tools to do their jobs.



7) Tick the correct name of the picture given below.



Shorts ☐

Stars ☐

Aeroplane ☐

Tractor ☐

Shirt ☐

Moon ☐

Bullock Card ☐

Train ☐

8) Match the festival with the correct picture.



9) Tick the living thing from the options below.

☐☐

10) Tick ☒ the right behavior and cross out ☒ the wrong one.

☐☐